



SMT. S. G. ENG. MED. PRIMARY SCHOOL, GANDHINAGAR
SUMMATIVE ASSESSMENT – I (2024-25)
SUBJECT: ENGLISH TEXT



STD : IV

DATE : 23-10-2024

MARKS: 60

TIME: 2.00 hrs.

INSTRUCTION: Attempt all the questions given in the question paper. Read the questions carefully.

SECTION - A (OBJECTIVE)

Q.1 (A) Choose the correct answer from given options. (0.5x10=5)

1. Shetty granted _____ wishes to the fir tree.
(a) five (b) four (c) three (d) two
2. A person who cannot hear is _____.
(a) lame (b) blind (c) mute (d) deaf
3. The rabbit had _____ eyes.
(a) brown (b) red (c) pink (d) blue
4. The rabbit had a _____ in his waistcoat.
(a) key (b) watch (c) lock (d) ring
5. Helen could not _____.
(a) see or hear (b) walk or talk (c) see or walk (d) hear or talk
6. _____ is never harsh.
(a) Earth (b) World (c) Sunlight (d) Moonlight
7. Alice saw _____ fountain in the garden.
(a) small (b) golden (c) bright (d) cool
8. Nasruddin hit the target at _____.
(a) the first time (b) the second time
(c) the third time (d) the fourth time
9. Who is the poet of the poem 'Noses'?
(a) Aileen Fisher (b) Mary Daunt
(c) H.W. Longfellow (d) Ruskin Bond
10. The boy in the poem 'Why' is _____.
(a) curious (b) sad (c) naughty (d) brave

Q.1 (B) Fill in the blanks with appropriate words from the brackets.

(0.5x5=2.5)

(two men, kind, goat, words, broke)

1. Soon a _____ came and ate all the green leaves.
2. _____ came along and stole the gold leaves.
3. The wind _____ the glass leaves.
4. Miss Sullivan was strict but _____
5. Helen understood that _____ were the most important things in the world.

Q.1 (C) Match the following.

(0.5x5=2.5)

- | | |
|--------------|---------------------------------|
| 1. Chatting | - shooting with a bow and arrow |
| 2. Amazement | - talking informally |
| 3. Archery | - protecting from attack |
| 4. Defending | - great surprised |
| 5. Target | - the goal intended to be hit |

Q.2 (A) State whether the following statements are 'True' or 'False'.

(0.5x5=2.5)

1. Alice was listening to a song.
2. Alice wished she could be taller.
3. The boy wanted to know why the sun sinks behind the hills.
4. Shetty wanted to reward the tree.
5. If you want to giggle you should look into the mirror.

Q.2 (B) Write antonym of the following words.

(0.5x5=2.5)

- | | |
|------------|----------|
| 1. Friends | 2. Smart |
| 3. Appear | 4. Known |
| 5. Always | |

Q.2 (C) Write the meaning and make sentences of the following words.

(1x5=5)

- | | |
|--------------|--------------|
| 1. Raindrops | 2. Breathing |
| 3. Afraid | 4. Illness |
| 5. Forever | |

Q.3 (A) Write the rhyming word for the underlined word.

(1x5=5)

1. Why is the _____ so high?
2. Do you know the colour of _____?
3. Have you you found who made the _____?
4. Put the glass in the sink after you finish your _____.
5. I saw your red tshirt on the _____.

Q.3 (B) Write one word for these which means.

(1x5=5)

1. To walk fast _____
2. Happy _____
3. To think _____
4. At once _____
5. To be inquisitive _____

SECTION - B (SUBJECTIVE)

Q.4 (A) The spellings of these words are jumbled. Put them right and make sentences of your own.

(1x5=5)

- | | |
|----------|-----------|
| 1. wokn | 2. wism |
| 3. dael | 4. blarme |
| 5. llihs | |

Q.4 (B) Answer the following questions in one sentence.

(1x6=6)

1. Although Helen could not hear or see, what kind of girl was she?
2. What happens when the day is over?
3. Where did the rabbit go?
4. What did Nasruddin boast about?
5. Name any two games that you play, in which you have to run.
6. Who was Shetty?

Q.5 (A) Answer the following questions in short.

(2x3=6)

1. Describe in your own words the garden that Alice saw.
2. What did Helen learn when the teacher put her hand into running water?
3. Why did Nasruddin say, "It was my aim" the third time?

Q.5 (B) Answer the following questions in detail.

(2.5x2=5)

1. Classify the following actions which will make others happy/unhappy.

(respecting others, not saying thank you, being polite, playing with friends, visiting a sick friend, not sharing, telling lies, being greedy)
2. What does 'features mean'? What are the different kinds of features of people we come across in the world?

Q.6 (A) Who said to whom?

(1x4=4)

1. "Thank you, you have been kind to me."
2. "It wasn't my aim. It was Azad's aim."
3. "I like my old needle like leaves best."
4. "Oh, my ears and whiskers! How late it's getting!"

Q.6 (B) Complete the stanza.

(4x1=4)

Run in the raindrops.....

.....

.....

.....Then run back again.



SMT. S. G. ENG. MED. PRIMARY SCHOOL, GANDHINAGAR
SUMMATIVE ASSESSMENT – I (2024-25)
SUBJECT: ENGLISH GRAMMAR



STD : IV

DATE : 16-10-2024

MARKS: 60

TIME: 2.00 hrs.

INSTRUCTION: Attempt all the questions given in the question paper. Read the questions carefully.

SECTION – A (OBJECTIVE)

Q-1 (A) Classify given words in the proper columns. (0.5×12=6)

[bull, vixen, pencil, almirah, princess,
cow, wall, queen, book, prince, fox, king]

MASCULINE	FEMININE	NEUTER

(B) Fill in the blanks with appropriate verbs. (0.5×6=3)

1. Ramdeen is _____ the plant. (water)
2. Mrs. Renu is _____ the class. (teach)
3. Grandpa is _____ newspaper. (read)
4. I _____ no extra pen. (has/have)
5. Our school _____ a huge playground. (has/have)
6. Max and John _____ childhood friends. (is/ are)

(C) Add the letter to the given letters to create verbs (0.5×6=3)

- | | |
|-------------|-------------|
| 1. Re _____ | 2. Ma _____ |
| 3. Wr _____ | 4. Gi _____ |
| 5. Ta _____ | 6. Th _____ |

(D) Match the nouns with the pronouns which are given below. (0.5×4=2)

- | | |
|-------------------|---------|
| A | B |
| 1. Boys and girls | a. He |
| 2. Rohan | b. They |
| 3. Elephant | c. She |
| 4. Soniya | d. It |

Q-2 (A) Fill in the blanks with correct sound from the brackets.

(0.5×6=3)

1. Apes _____. (growl/ gibber)
2. Bees _____. (buzz/ hiss)
3. Asses _____. (cackle/ bray)
4. Bitterns _____. (bray/ boom)
5. Chickens _____. (peep/ growl)
6. Geese _____. (boom/cackle)

Q-2 (B) Fill in the blanks with suitable adjectives given in the brackets.

(0.5×6=3)

[innocent, famous, great, interesting, tidy, green]

1. Mr. Mohit is looking very _____ today.
2. Gulliver's Travels is an _____ story.
3. Mohak bought some _____ vegetables.
4. I saw an _____ man while going to school.
5. Sachin Tendulkar is a _____ cricketer.
6. Gandhiji was a _____ patriot.

Q-2 (C) Fill in the blanks with suitable words from the brackets.

(0.5×6=3)

1. The boy forgot _____ maths book at home. (his/ her)
2. That is _____ house. (theirs / their)
3. Nisha is walking with _____ dog. (her/his)
4. The driver could not control _____ the speed of car. (her/his)
5. Jack and Victoria are going to a fair with _____ father. (her/their)
6. The baby is crying for _____ mother. (his/its)

Q-3 (A) Fill in the blanks with correct degree of adjectives.

(1×5=5)

1. Sam is the _____ boy in the class. (Intelligent)
2. Rohan's bouquet is _____ than any other's in the party. (pretty)
3. I have purchased three shirts. The green one is the _____. (Costly)
4. John is tall boy but Julien is the _____ in the whole class. (Tall)
5. In my section all are my friends. But Hazel is my _____ friend. (good)

Q-3 (B) Fill in the blanks with suitable adverbs given in the brackets. (0.5×4=2)

[softly, hard, carefully, weekend]

1. Lata is sniffing the flower_____.
2. At the_____we set out for outing.
3. Manish hardly makes mistakes because he works_____.
4. Labourers worked_____to build the huge building.

Q-3 (C) Fill in the blanks with suitable pronouns given in the brackets. (0.5×4=2)

1. This pet dog belongs to Nikunj. This dog is_____. (His/theirs)
2. This shop belongs to Mr. Mehta and his sons. The shop is_____. (His/theirs)
3. This chain belongs to Tommy. This chain is_____. (his/ its)
4. This doll belongs to Nikita. This doll is_____. (theirs/hers)

SECTION –B (SUBJECTIVE)

Q-4 (A) Write the gender of the underlined words (nouns) and rewrite the sentences. (1×5=5)

1. My sister is talking to my niece.
2. The man was looking at the picture.
3. Ravi was feeding the cows.
4. Uncle is giving a parcel to Mathew.
5. Have you seen our servant anywhere?

Q.4 (B) Underline the adverbs and write what kind of adverbs (1×5=5)

1. Naveen speaks to me politely.
2. Children come here to play twice a week.
3. Renuka participated in the competition last year.
4. John is taking a bath now.
5. Mr. Bose occasionally delivers lecture.

Q-4 (C) Write an essay on any one topic “Our national flag” or “Pollution” in 100 to 150 words. (1×5=5)

Q-5 (A) Write a letter to your friend telling him about the benefits of reading book (1×5=5)

OR

(A) Write a letter to your father requesting him to send money for an educational trip to Manali.

Q.5 (B) Read the following passage carefully and answer the given questions. (1 ×5=5)

Q.5 (C) A trader used to live in Jerusalem. Once he was passing through a narrow street. He was going to a city with some valuable goods. He was on a horse. While riding he was chased by some dacoits. They stopped the trader, beat him mercilessly and looted all his valuables and fled away. The trader was beaten so hard that he fainted. After sometime a kind person saw the trader's bleeding. He took him to a hospital for treatment on horseback.

Questions:

- 1 Where did the trader live?
- 2 Where was he passing through?
- 3 Why the trader got fainted?
- 4 Why was the trader chased by dacoits?
- 5 Who helped the trader and took him to the hospital?

Q-6. Describe the following picture.

(1×3=3)





SMT. S. G. ENG. MED. PRIMARY SCHOOL, GANDHINAGAR
SUMMATIVE ASSESSMENT – I (2024-25)
SUBJECT: ENVIRONMENTAL STUDIES



STD : IV

MARKS: 60

DATE : 19-10-2024

TIME: 2.00 hrs.

INSTRUCTION: Attempt all the questions given in the question paper. Read the questions carefully.

SECTION – A (OBJECTIVE)

Q1. Select the correct option :

[0.5 X 10 = 5]

1. Which is the largest river of Gujarat?
A) Narmada B) Tapi C) Mahi D) Sabarmati
2. What is not seen in a baby's mouth at the time of its birth?
A) A tongue B) Teeth C) Palate D) Lips
3. Which tool a mason use for laying bricks and plastering?
A) An anvil B) A hammer C) A trowel D) A scissor
4. In which state did the tree lover named Amrita Devi live?
A) Gujarat B) Maharashtra C) Madhya Pradesh D) Rajasthan
5. When does a litchi tree flower blooms?
A) February B) March C) January D) December
6. How many medals in international events has Karnam Malleswari won?
A) 20 B) 29 C) 49 D) 39
7. Who argued that Shyamala had taken a breath in between?
A) Rekha B) Sushila C) Rosy D) Vasudha
8. Which of the following vegetables grows as a root ?
A) Cauliflower B) Cabbage C) Brinjal D) Carrot
9. Which of the following substances does not dissolve in water?
A) Sand B) Sugar C) Salt D) Edible soda
10. Whom did Amrita meet on waking up every day?
A) Parents B) Trees C) Friends D) Pets

Q2. (A) State whether the following statements are 'True' or 'False'.

[0.5x 8 = 4]

1. Kabaddi is a game of bravery.
2. Aquatic creatures die due to water pollution caused by industrial waste.
3. Roots are the part of plant that grow under the ground.
4. A baby has teeth since birth.
5. Honey bees are attracted less to litchi flowers.
6. The king's men had come to cut down the trees.
7. Riya told Jiya to write all the details about the journey.
8. Riya went in car from railway station to her mama's house.

(B) Match the following :

[0.5x6 = 3]

Column A

Column B

- | | |
|-------------------|------------------------|
| 1. Sarita Gaekwad | a. baby sister's birth |
| 2. Sania Mirza | b. make beehive |
| 3. Neem flower | c. Runner |
| 4. Black smith | d. Tennis |
| 5. Worker bees | e. used as medicine |
| 6. Kiran's family | f. Anvil |

Q3. (A) Fill in the blanks with appropriate words :

[1x8 = 8]

1. _____ part of the khejadi trees is used as medicine.
2. Riya borrowed a story book from _____.
3. There are _____ in the mouth to chew the food.
4. Karnam Malleswari can lift a weight of _____ kg.
5. Kabirvad is situated in _____ district.
6. The kitchen of Nilabhai's house is made in the _____.
7. The children made _____ castle on the beach.
8. In Kerala, people eat vegetables made from _____ flowers.

(B) Classify the following vegetables into those growing under the ground and those the growing above the ground [1.5x2=3]


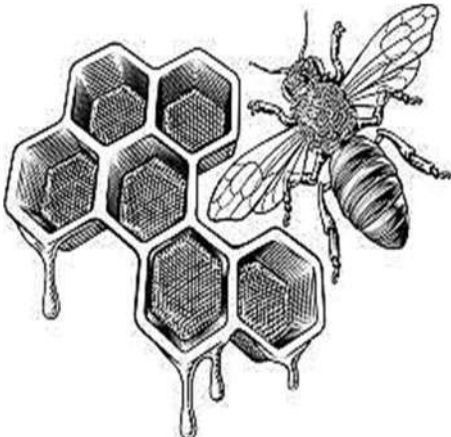


[Cauliflower, Cabbage, Ginger, Turmeric, Sweet potato, Cucumber]

A) Vegetables growing under the ground:

B) Vegetables growing above the ground :

Q4. (A) Recognise the picture and write one sentence about it :

[1x4= 4]

A)	B)
	
C)	D)
	

Q4. Write the difference between Kutcha house and Pucca house:

[3x1=3]

SECTION -B (SUBJECTIVE)

Q.5 (A) Answer the following questions in 2-3 sentences:

[2x 3=6]

1. What are the different kinds of aquatic animals?
2. Who inspired and supported Jwala, Leela and Heera to play Kabaddi?
3. What are prop roots?

(B) Answer the following questions in short:

[3x3=9]

1. Why did the Nilabhai's father has to leave Pakistan and come to India?
2. Draw and colour the picture of two vegetables which grow under the ground .
3. Write importance of Khejadi Tree.


Q6 (A) Answer the following in detail:

[2.5x4=10]

1. What did Riya see at the crossing?
2. Write a short note: Karnam Malleswari
3. How did Anita start her bee keeping business?
4. How did Riya and Fiyona become friends?

(B) Describe the picture in five sentences.

[5x1=5]





SMT. S. G. ENG. MED. PRIMARY SCHOOL, GANDHINAGAR
SUMMATIVE ASSESSMENT – I (2024-25)
SUBJECT: MATHEMATICS



STD : IV

MARKS: 60

DATE : 21-10-2024

TIME: 2.00 hrs.

INSTRUCTION: Attempt all the questions given in the question paper. Read the questions carefully.

SECTION- A (OBJECTIVE)

Q.1 (A) Fill in the blanks:

[1×5=5]

1. $4 \times 600 \text{ ml} = \underline{\hspace{2cm}}$ ml.
2. The ink of a pen is measures in = $\underline{\hspace{2cm}}$
3. The Biggest unit of capacity is = $\underline{\hspace{2cm}}$
4. ₹ 59.88 = $\underline{\hspace{2cm}}$ paise.
5. The standard unit of capacity is = $\underline{\hspace{2cm}}$

(B) Choose the correct option:

[1×10=10]

- 1) If the cost of diesel ₹90 per litre, then the cost of 40 litre diesel is
(a) ₹3600 (b) ₹3520 (c) ₹3433 (d) ₹ 3620
- 2) If 15 students can travel in one van, then 225 students can travel in $\underline{\hspace{2cm}}$.
(a) 12 (b) 15 (c) 10 (d) 13
- 3) A seller was selling 4 packets of chips for ₹40 in an offer. Joy bought 5 such packets. How much money did he pay?
(a) 20 (b) 60 (c) 50 (d) 30
- 4) How many ₹100 notes can make ₹900?
(a) 12 (b) 9 (c) 20 (d) 3
- 5) The unit for measure the capacity of milk in a glass is $\underline{\hspace{2cm}}$.
(a) mililitres (b) litres (c) metres (d) grams
- 6) ₹ 5 = $\underline{\hspace{2cm}}$ paise
(a) 500 (b) 200 (c) 400 (d) 900
- 7) 1 more than 999 is $\underline{\hspace{2cm}}$.
(a) 972 (b) 1000 (c) 876 (d) 990
- 8) What we use for 6: 45 in the morning
(a) p.m (b) a.m (c) night (d) hour

- 9) Which number comes exactly between 550 and 650 _____.
 (a) 500 (b) 600 (c) 640 (d) 700
- 10) The unit to measure the capacity a glass of water is _____.
 (a) Mililitres (b) litres (c) metres (d) grams

Q 2 (A) Change into 24- hour clock time:

[0.5x 6 = 3]

- 1) 2: 30 p.m = _____ 2) 6:45 am = _____ 3) 12 in day = _____
 4) 7:50 am = _____ 5) 6:05 pm = _____ 6) 5:20 am = _____

(B) Write the correct form you will use in the following conditions, (Out of a.m or p.m):.

[0.5 x 6=3]

- 1) Going to sleep at 9:30 = _____
 2) Dinner time 8:00 = _____
 3) School time at 7:20 = _____
 4) Breakfast at 7:00 = _____
 5) 8:30 at the night = _____
 6) 2 hours after 5:00 p.m.= _____

(C) Put < , > or = in the blanks to compare money:

[0.5 x 6=3]

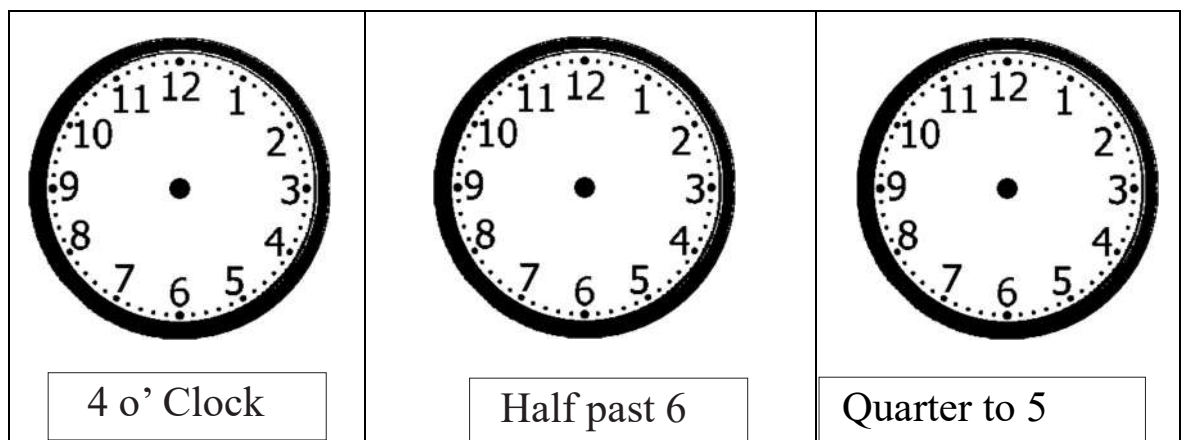
- 1) ₹ 645 _____ ₹ 784 4) ₹ 550 _____ ₹ 505
 2) ₹ 74.64 _____ ₹ 79.64 5) ₹ 470 _____ ₹ 472.46
 3) ₹ 948 _____ ₹ 846.87 6) ₹ 555 _____ ₹ 519.26

(D) Draw the side, front and top view of bus:

[1 x 3 =3]

(E) Show the time in the clocks by drawing hands:

[1 x 3=3]



SECTION - B (SUBJECTIVE)

Q.3 (A) Subtract:

[1 x 2=2]

- 1) 34 L 838 ml from 54 L 998 ml
- 2) 72 L 890 ml from 102 L 185 ml

(B) Add:

[1 x 2= 2]

- 1) 512 L 263 ml and 130 L 138 ml
- 2) 143 L 432 ml and 128 L 384ml

(C) Make greatest and Smallest number without repeating the digits:

[1 x 5 = 5]

	Digits	Greatest Number	Smallest Number
(1)	6, 8, 5, 4		
(2)	0, 2, 5, 7		
(3)	9, 1, 6, 5		
(4)	2, 5, 0, 3		
(5)	9, 7, 0, 4,		

Q.4 (A) Find that if these things have profit or loss on being sold:

[1 x 5 =5]

Item	Cost Price	Selling Price	Profit or Loss
	150	180	
	250	350	
	90	100	
	300	250	
	100	90	

(B) Convert the following**[1 x 5 = 5]**

- 1) 3400 paise = ₹ _____
- 2) 42388 ml = _____ l _____ ml
- 3) 23 L 128 ml = _____ ml
- 4) ₹ 34.84 = _____ paise
- 5) 6 L 600 ml = _____ ml

(C) Sonu and his friend Sagar went to Park along with his family in Bhopal. There are different rides, out of which they took some rides. The following are the rides, their cost and duration given in table.

[5 x 1 = 5]

Ride Name	Ticket-price	Duration for (one round)
Dragon ride	₹30	18 minutes
Jumbo monkey	₹20	20 minutes
Ferris wheel	₹30	15 minutes
Merry-go-round	₹45	05 minutes
Mini-train	₹25	20 minutes

Answer the following questions:

1. Which rides take less than 15 minutes to complete one round?
2. Which ride makes 3 rounds in an hour?
3. Which ride gives them the less time taking the most money.
4. What is the price for 1 round of mini- train?
5. Sonu and Sagar along with his family went for the Dragon ride. They paid ₹ 400 in total. How many people went for the Dragon ride?

Q.5 Solve the following word problems: (any three)**[3 x 2 = 6]**

- 1) Manish went for a movie. He bought a movie ticket for ₹465, a samosa for ₹50 and One packets of popcorn for ₹ 95. find the total amount of money spent by him ?
- 2) Mr. Sohan is on 20 days leave starting from 8th October. On which date will he join the office?
- 3) A bus leaves Ahmedabad at 8:30 p.m. and reaches Vapi after 9 hours. At what time does the bus reach Vapi?
- 4) There are 20987 female teachers and 5686 male teachers in a state. What is the total number of teachers in the state?
- 5) Sonal types 40 words in a one minute. How many words would she types in 8 minutes?



SMT. S. G. ENG. MED. PRIMARY SCHOOL, GANDHINAGAR
SUMMATIVE ASSESSMENT – I (2024-25)
SUBJECT: HINDI



STD : IV

DATE : 15-10-2024

MARKS: 60

TIME: 2.00 hrs.

INSTRUCTION: Attempt all the questions given in the question paper. Read the questions carefully.

SECTION: A (OBJECTIVE)

प्र.१ (अ) रिक्त स्थानों की पूर्ति कीजिए ।

(०.५×६=३)

- १) जगदीशचंद्र बोस ने एक उपकरण का निर्माण किया जिसका नाम _____ था ।
- २) चारों भाई चलते- चलते एक _____ में पहुँचे ।
- ३) शिवाजी महाराज की माता का नाम _____ था ।
- ४) ठंडे पानी में खड़े रहने की _____ कोई भी नहीं जुटा पा रहा था ।
- ५) बीरबल _____ पका रहे हैं ।
- ६) महाराष्ट्र में छत्रपति शिवाजी महाराज नाम के एक _____ थे ।

(ब) निम्नलिखित शब्दों के अर्थ लिखिए ।

(०.५×६=३)

- | | | |
|-------------|------------|-------------|
| १) वर्षगाँठ | २) संस्कार | ३) मुसाफिर |
| ४) कर्तव्य | ५) स्वयं | ६) प्रदर्शन |

(क) निम्नलिखित शब्दों के लिंग लिखिए ।

(०.५×६=३)

- | | | |
|---------|----------|---------|
| १) बहन | २) लड़का | ३) नर |
| ४) बंदर | ५) चाचा | ६) देवर |

प्र.२ (अ) निम्नलिखित शब्दों के बहुवचन लिखिए ।

(०.५×६=३)

- | | | |
|----------|---------|-----------|
| १) कपड़ा | २) लोटा | ३) कड़ाही |
| ४) कुरती | ५) थाली | ६) जूता |

(ब) निम्नलिखित वाक्यों में उचित विराम चिन्ह लगाइए ।

(०.५×६=३)

- १) क्या मैं अन्दर आ सकता हूँ
- २) अरे यह तो मेरा ही भाई है
- ३) तुम इसे संभालकर रखो
- ४) राधा सीता रीना और मीना सभी को नाटक पसंद आया
- ५) मैंने तुम सबको बहुत रोका
- ६) पेड़- पौधे हमारे सच्चे मित्र हैं

(क) निम्नलिखित वाक्य को किसने किससे कहा ?

(१×५=५)

- १) “इस टहनी को तुमने क्यों तोड़ा ?”
- २) “मैं इस मरे हुए शेर में अपनी विद्या से जान फूँक सकता हूँ ।”
- ३) “मैं अपनी विद्या से इन हड्डियों से शेर का आकार बना सकता हूँ ।”
- ४) “मुझे पेड़ के ऊपर चढ़ जाने दो, फिर अपनी विद्या दिखाओ ।”
- ५) “ मेरे कई अन्य भाई भी हैं”।

प्र.३ (अ) नीचे दिए गए शब्दों के वाक्य में प्रयोग कीजिए ।

(१×४=४)

- | | |
|----------|------------|
| १) क्रोध | २) विज्ञान |
| ३) कुशल | ४) पेड़ |

(ब) निम्नलिखित शब्दों के अनेक शब्दों के एक शब्द लिखिए ।

(१×६=६)

- १) पढ़ानेवाला
- २) चित्र बनाने वाला
- ३) विज्ञान के क्षेत्र में नई खोज करने वाला
- ४) संगीत का ज्ञाता
- ५) सौर मंडल का अध्ययन करने वाला
- ६) पृथ्वी के अंदर रहने वाले तत्वों का ज्ञाता

SECTION- B (SUBJECTIVE)

प्र.४ (अ) निम्नलिखित प्रश्नों के उत्तर एक वाक्य में लिखिए ।

(१×४=४)

- १) कृष्ण को सुबह से यशोदा कहाँ भेजती है ?
- २) जग में कौन -से दो मुसाफिर सच्चे हैं ?
- ३) शिवाजी की माँ उनको किसकी कहानियाँ सुनाती थी ?
- ४) चारों भाइयों ने आपस में क्या वादा किया ?

(ब) निम्नलिखित प्रश्नों के उत्तर दो वाक्य में लिखिए ।

(२×४=८)

- १) शिवाजी महाराज युद्ध के समय कौन से शस्त्र का उपयोग करते थे ?
- २) यात्रा के समय कौन- कौन सी चीजे साथ में लेकर जाते हैं ?
- ३) बीरबल ने अकबर बादशाह की आँखे कैसे खोलीं ?
- ४) अकबर बादशाह ने क्या घोषणा की ?

(क) काव्य पक्तियों को पूरा कीजिए ।

(१×४=४)

जग में _____
_____ प्यारे
जग को _____
_____ बढ़ते ।

प्र.५ (अ) निम्नलिखित गद्यांश को पढ़कर उसके नीचे दिए गए प्रश्नों के उत्तर लिखिए ।

(१×३=३)

एक जंगल था । उस जंगल में एक शेर भोजन करके आराम कर रहा था । इतने में एक मक्खी उड़ती-उड़ती वहाँ आ पहुँची। शेर ने दो -तीन दिनों से स्नान नहीं किया था । इसलिए मक्खी शेर के कान के एकदम पास भिन-भिन करने लगी । शेर को बहुत मुश्किल से नींद आई थी । उसने पंजा उठाया । मक्खी फिर से भिन-भिन करने लगी । शेर को गुस्सा आ गया ।

प्रश्न

- १) जंगल में कौन आराम कर रहा था ?
- २) शेर को नींद कैसी आई थी ?
- ३) मक्खी शेर के कान के पास क्या करने लगी ?

(ब) किसी एक विषय पर निबंध १० वाक्य में लिखिए ।

(१×४=४)

१) वर्षा का महत्व


२) अनुशासन

(क) विद्यालय में प्रवेश पाने हेतु प्रधानाचार्य को पत्र लिखिए ।

(१×४=४)

(ड) निम्नलिखित चित्रों के बारे में तीन वाक्य में लिखिए ।

(१×३=३)





SMT. S. G. ENG. MED. PRIMARY SCHOOL, GANDHINAGAR
SUMMATIVE ASSESSMENT – I (2024-25)
SUBJECT: GUJARATI



STD : IV

DATE : 16-10-2024

MARKS: 60

TIME: 2.00 hrs.

INSTRUCTION: Attempt all the questions given in the question paper. Read the questions carefully.

SECTION – A (OBJECTIVE)

પ્ર-૧ (અ) નીચે આપેલી ખાલી જગ્યા પૂરો.

(૧ × ૫ = ૫)

- (૧) ચાંદો થાળી જેવો_____ દેખાતો હતો.
- (૨) વાંદરાના બચ્ચાંના નામ ચિકુ ,મિકુ ટિકુ અને _____ હતા.
- (૩) પતરંગા ને_____ લાગી હતી.
- (૪) નદી કિનારે_____ મિત્રો ગયાં.
- (૫) રંગોને પાણીમાં _____ બિછાવશે.

(બ) નીચે આપેલ શબ્દ પરથી વાક્ય બનાવો.

(૧ × ૪ = ૪)

- (૧) ભીંત -
- (૨) રેતી -
- (૩) પૂંછળી -
- (૪) ઘર -

(ક) નીચે આપેલ વાક્ય સાચું છે કે ખોટું તે લખો.

(૦.૫ × ૬ = ૩)

- (૧) પતરંગો વાદળી જેવા રંગનો છે. -
- (૨) "મસ્તી કી પાઠશાલા" નો દરવાજો હંમેશા ખુલ્લો જ હોય છે. -
- (૩) લખોટી ટપ્પ દઈને છોકરાના માથા પર પડી.-
- (૪) બાળકો સફેદ પીંછાવાળુ પંખી આમથી તેમ ઉડાડતા હતા.-
- (૫) ફૂલ રેકેટ રમવામાં પતરંગો પોતાને ભૂખ લાગી હતી તે પણ ભૂલી ગયો.-
- (૬) પતરંગો રંગે રૂપાળો હતો. -

પ્ર.૨ (અ) નીચે આપેલાં શબ્દોના સમાનાર્થી શબ્દ લખો.

(૦.૫ x ૬ = ૩)

- | | | |
|-----------|-----------|---------|
| (૧) ઉપવન | (૩) ગાગર | (૫) આભ |
| (૨) કોકિલ | (૪) ચીતરી | (૬) બીક |

(બ) નીચે આપેલાં શબ્દોના વિરુદ્ધાર્થી શબ્દ લખો.

(૦.૫ x ૬ = ૩)

(૧) મીઠા

(૩) અંદર

(૫) નાની

(૨) બેઠો

(૪) રડી

(૬) જીત

(ક) નીચે આપેલાં શબ્દોની જોડણી સુધારો.

(૦.૫ x ૪ = ૨)

(૧) ગીલ્લી -

(૩) લખોટિ -

(૨) ખીસકોલી -

(૪) જલેબિ -

(ડ) નીચે આપેલા શબ્દોમાં ખૂટતો અક્ષર લખો.

(૦.૫ x ૬ = ૩)

(૧) આ કા ____

(૨) ત ____ વ

(૩) કા ____ ળ.

(૪) સૂ ____ જ

(૫) હ સ ____

(૬) ચો ક ____ ટ

પ્ર-૩ (અ) નીચે આપેલાં જોડકા જોડો.

(૦.૫ x ૬ = ૩)

૧. ચીં ચીં

કબૂતર

૨ ધૂ. ધૂ.

ચકલી

૩. કલબલ કલબલ

વાંદરો

૪. હૂપ હૂપ

કાબર

૫ હાઉ હાઉ

મોર

૬. ટેહૂક ટેહૂક

ફતરો

(બ) નીચે આપેલા શબ્દો ધ્યાનથી વાંચો અને વિચારો કે આમાં એવું શું છે જે માણસ બનાવી શકે અને એવું શું શું છે જે માણસ ન બનાવી શકે.

(૦.૫ x ૮ = ૪)

[શંખ , છીપલું. , માળા , કાગળની હોડી , રેતીના બંગલા , આકાશ , પાણી , ઢીંગલી]

માણસ બનાવી શકે	માણસ બનાવી ન શકે

SECTION – B (SUBJECTIVE)

પ્ર-૪ (અ) નીચેનાં પ્રશ્નોનાં એક વાક્યમાં જવાબ આપો.

(૧ x ૫ = ૫)

- (૧) દરિયા કાંઠે રેતીમાં શું કરવાનું છે?
- (૨) વાંદરાના બચ્ચાં કેવાં કેવાં તોફાન કરતા હતા?
- (૩) "નાચે તાતા થૈયા" કાવ્યના કવિ કોણ છે?
- (૪) સુરજદાદા ક્યાં આવશે?
- (૫) પતરંગો દેખાવે કેવો હતો?

(બ) નીચે આપેલ અધૂરી કાવ્યપંક્તિ પૂર્ણ કરો.

(૩ x ૧ = ૩)

દરિયા કાંઠે રમવા ચાલો , _____
 રેતીમાં રમવાને ચાલો , _____
 શુંખલા છીપલાં વીણીને , _____

(ક) તમારા મિત્રને તમારે ગામ તમારી સાથે રહેવા આવવાનું આમંત્રણ આપતો પત્ર લખો.

(૪ x ૧ = ૪)

(ડ) નીચે આપેલા વિષયોમાંથી કોઈપણ એક નિબંધ પર પાંચ વાક્ય લખો.

(૧ x ૫ = ૫)

(૧) વર્ષાઋતુ

(૨) દિવાળી

પ્ર-૫ (અ) નીચે આપેલ ફકરો સુંદર અક્ષરે લખો.

(૫ x ૧ = ૫)

પુસ્તક આધુનિક માનવીને આનંદ આપનાર સૌથી અને સૌથી શિષ્ટ સાધન છે. તેનો આનંદ અનેરો હોય છે. પુસ્તકની પ્રશસ્તિ કરીએ એટલી ઓછી. માણસને એની સાથે એવી લાગણી છે કે પુસ્તક સાથે તે હસે છે, રડે છે, ઉદાસ થઈ જાય છે, આનંદ પામે છે. પુસ્તકની હાજરીમાં પોતાની જાત સાથે વાતો કરવા લાગે છે અને પોતાની જાતને ક્યારેક તો માત્ર પુસ્તક પાસે જ ખુલ્લી કરે છે. પુસ્તક માનવીને માટે દિલોજાન દોસ્ત છે. પુસ્તક એક વિસ્મયકારક વસ્તુ છે. તેને ભૌતિક શરીર હોય છે અને તેને આત્મા પણ હોય છે. વિચારો, લાગણીઓ, ધબકાર, જ્ઞાન, માહિતી કંઈ કેટલુંય સંયોજિત થઈને તેમાંથી પુસ્તક બને છે. તેની સાથે તમે વાતો કરી શકો છો, સફર કરી શકો છો.

(બ) નીચેનો ફકરો વાંચી તેના પ્રશ્નોના જવાબ આપો.

(૧ × ૫ = ૫)

વૃક્ષો અન્યના સુખને માટે છાયડો આપે છે. પોતે તાપમાં તપીને અને અસહ્ય ગરમી વેઠીને બીજાને પોતાના ફળ આપે છે. પરોપકારી મનુષ્યો એવા જ હોય છે. સુખડ જેમ વધારે ઘસાય તેમ વધારે સુગંધ આપે. શેરડી જેમ વધારે પિલાય તેમ વધારે રસ આપે. સોનું જેમ વધારે તપે તેમ વધારે ચળકાટ ધારણ કરે. ઉદાર મનુષ્યો પોતાના સદગુણો તજતા નથી. જગત તેમની પ્રશંસા કરે કે ના કરે, તેઓ શ્રીમંત હોય કે ગરીબ, તેઓ ગમે તે સ્થિતિ માં હોય પોતાના માર્ગમાંથી તેઓ ચલિત થતા નથી. જે બીજાના માટે જીવતો નથી તેનું જીવન નિરર્થક છે. જીવવા ખાતર જીવવું એ તો કાગડા- ફૂતરાનું જીવન. જેઓ સૃષ્ટિના કલ્યાણ માટે જીવે છે તેઓ પોતાનું જીવન સાર્થક કરે છે

પ્રશ્નો :-

- (૧) વૃક્ષો અન્યના સુખ માટે શું આપે છે?
- (૨) પરોપકારી મનુષ્યોને કોની સાથે સરખાવવામાં આવ્યા છે?
- (૩) કેવા મનુષ્યનું જીવન નિરર્થક છે?
- (૪) કેવા લોકો પોતાનું જીવન સાર્થક કરે છે?
- (૫) આ ફકરાને યોગ્ય શીર્ષક આપો.

(ક) નીચે આપેલ ચિત્રનું બે કે ત્રણ વકયોમાં વર્ણન કરો.

(૧ × ૩ = ૩)

